


**Include 1st Quadrant & 4 Quadrant**

# EastMil



## Learning Math through Fun Activities

NAME \_\_\_\_\_

©Giang Ma

**Coordinate Graphing - First Quadrant**


40  
39  
38  
37  
36  
35  
34  
33  
32  
31  
30  
29  
28  
27  
26  
25  
24  
23  
22  
21  
20  
19  
18  
17  
16  
15  
14  
13  
12  
11  
10  
9  
8  
7  
6  
5  
4  
3  
2  
1  
0

0 1 2 3 4 5 6 7 8 9 10 11 12 13 14 15 16 17 18 19 20

Name: \_\_\_\_\_


**Coordinate Grid**      **Quadrants**

The grid is a 60x60 unit square, divided into four quadrants by the x and y axes. The x-axis is labeled from -30 to 30, and the y-axis is labeled from -30 to 30. The quadrants are labeled with Roman numerals: I in the top-right, II in the top-left, III in the bottom-left, and IV in the bottom-right.



**Coordinate Plane – 1<sup>st</sup> Quadrant: Easter Lily**

Directions: Use the coordinates (ordered pairs) on the list to graph a picture. Plot each point, and then connect it to the next point. Color it.

[illegible]

### Coordinate Plane – Four Quadrants Easter Lily

Directions: Use the coordinates (ordered pairs) on the graph to graph a picture. Plot each point, and then connect it to the next point in order.

[illegible]

# Term of Use

Copyright © Qiang Ma

All rights reserved by the author.

# Credits

I draw all the clipart myself for all the products in my store.

Thank you so much and I hope you enjoy this lesson.

